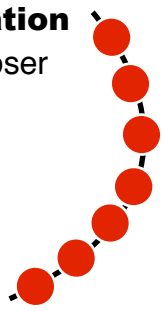




Numération

Décomposer le

7



Je suis capable de calculer combien de cerises sont cachées sous la boîte (la branche contient **7 cerises...**)

Three rows of boxes and cherries for decomposition:

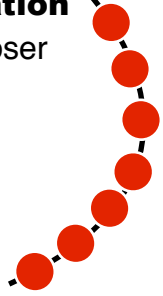
- Row 1: A tilted box with 3 cherries to its right, a horizontal box with 2 cherries to its left and 2 to its right, and a vertical box with 2 cherries to its left and 4 to its right.
- Row 2: A horizontal box with 1 cherry to its right, a horizontal box with 4 cherries to its left and 1 to its right, and a tilted box with 1 cherry to its left and 2 to its right.



Numération

Décomposer le

7



Je suis capable de calculer combien de cerises sont cachées sous la boîte (la branche contient **7 cerises...**)

Three rows of boxes and cherries for decomposition:

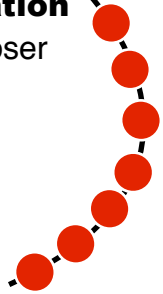
- Row 1: A tilted box with 3 cherries to its right, a horizontal box with 2 cherries to its left and 2 to its right, and a vertical box with 2 cherries to its left and 4 to its right.
- Row 2: A horizontal box with 1 cherry to its right, a horizontal box with 4 cherries to its left and 1 to its right, and a tilted box with 1 cherry to its left and 2 to its right.



Numération

Décomposer le

7



Je suis capable de calculer combien de cerises sont cachées sous la boîte (la branche contient **7 cerises...**)

Three rows of boxes and cherries for decomposition:

- Row 1: A tilted box with 3 cherries to its right, a horizontal box with 2 cherries to its left and 2 to its right, and a vertical box with 2 cherries to its left and 4 to its right.
- Row 2: A horizontal box with 1 cherry to its right, a horizontal box with 4 cherries to its left and 1 to its right, and a tilted box with 1 cherry to its left and 2 to its right.